



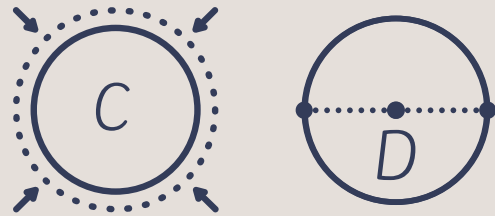
FINDING THE VALUE OF




What to do:
Find a few circle-shaped objects around you.



Measure the circumference and diameter of each object.



You will need:



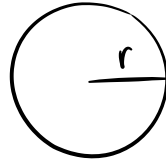
String:
Use to measure around the circle.

Ruler:
Measure the string and the diameter

Object	Circumference	Diameter	$\frac{C}{D}$

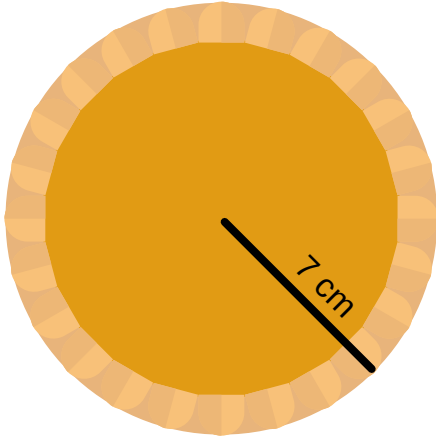
PI DAY PIES!

Find the radius, diameter,
and circumference of each pie.



$$\pi = 3.14$$

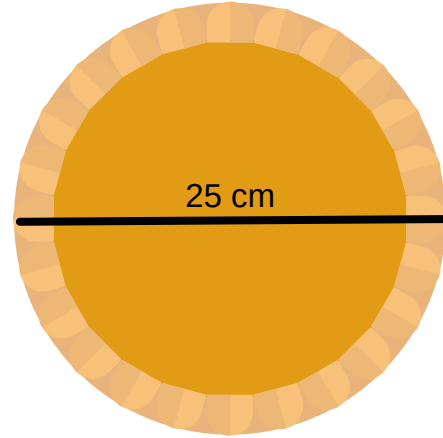
$$C = 2\pi r$$



The radius: _____

The diameter: _____

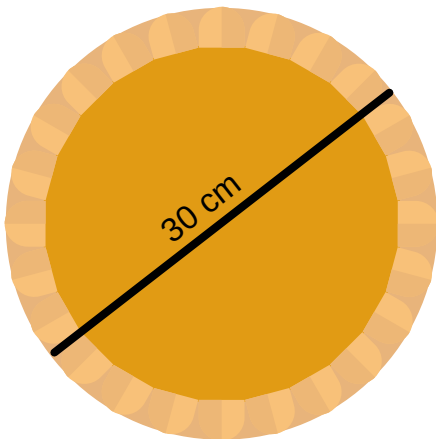
The circumference: _____



The radius: _____

The diameter: _____


The circumference: _____



The radius: _____

The diameter: _____

The circumference: _____



The radius: _____

The diameter: _____

The circumference: _____